




Name: _____

Two squirrels, Nibbles and Nutty, are working together to gather acorns. Help the friends add up how many acorns they have collected together.




$$\begin{array}{c} + \\ \hline \end{array} \quad \begin{array}{c} = \\ \hline \end{array}$$

○—○ ○—○ ○○—○○





$$\begin{array}{c} + \\ \hline \end{array} \quad \begin{array}{c} = \\ \hline \end{array}$$

○—○ ○—○ ○—○





$$\begin{array}{c} + \\ \hline \end{array} \quad \begin{array}{c} = \\ \hline \end{array}$$

○—○ ○—○ ○—○



$$\begin{array}{c} + \\ \hline \end{array} \quad \begin{array}{c} = \\ \hline \end{array}$$

○—○ ○—○ ○—○



$$\begin{array}{c} + \\ \hline \end{array} \quad \begin{array}{c} = \\ \hline \end{array}$$

○—○ ○—○ ○—○